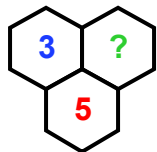


Les règles

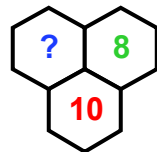
Pour faire les cascades, il faut remplir chaque grille avec des nombres.

Le nombre d'une case est le total (la somme) des cases qui se situent au-dessus.

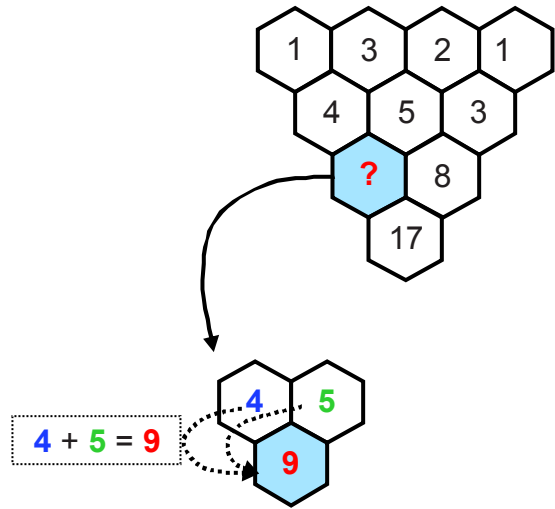
On peut utiliser plusieurs techniques pour trouver le nombre d'une case.



$3 + ? = 5$

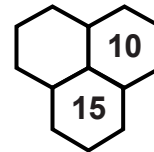
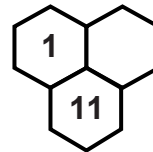
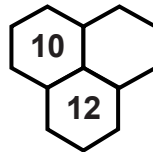
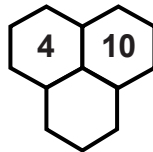
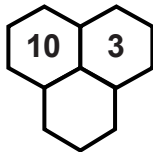


$? + 8 = 10$



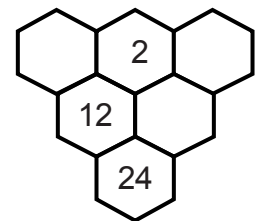
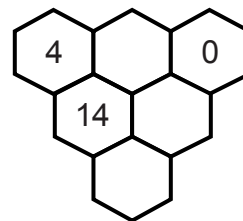
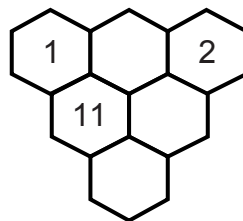
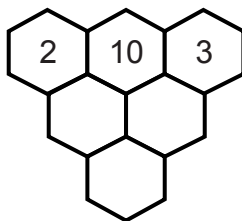
1

Entraînement



2

Mini-cascades



3

Cascades

