

Meures

CE2



PRÉNOT :

① Ecris l'heure sous chaque horloge.



h _ h _



h _ h _



h _ h _



h _ h _




h _ h _



h _ h _

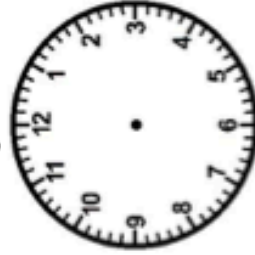


h _ h _

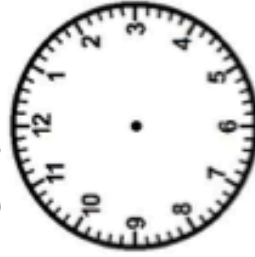


② Trace les aiguilles (rouge pour les heures, bleue pour les minutes).

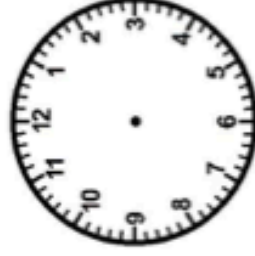
<https://millesseine.fr/>




9 h 00



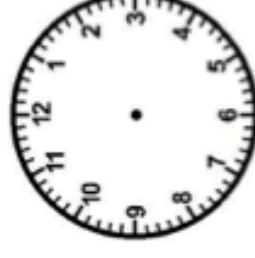
5 h 15



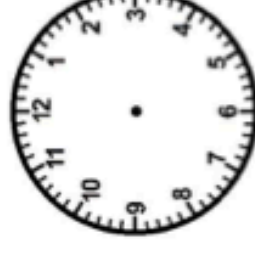
4 h 30



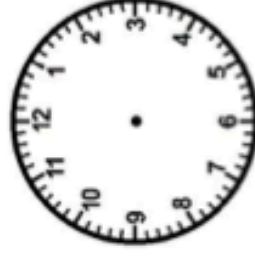
7 h 05



3 h 00



8 h 45

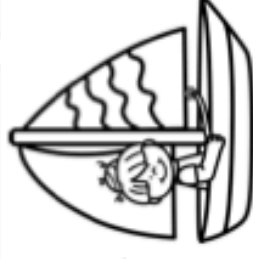


11 h 30



③ Résous ce problème.

Le cours de voile de Lisa a commencé à 9h30. Il dure 45 minutes. À quelle heure le cours se terminera-t-il ?



Meures / re / heure